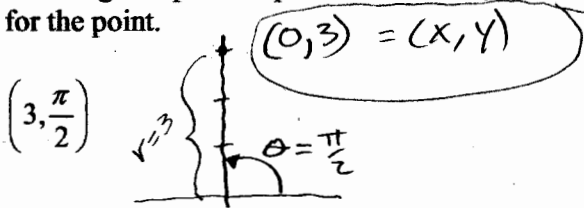


Name: Key Date: _____

1. For the given point in polar coordinates, find the corresponding rectangular coordinates for the point.

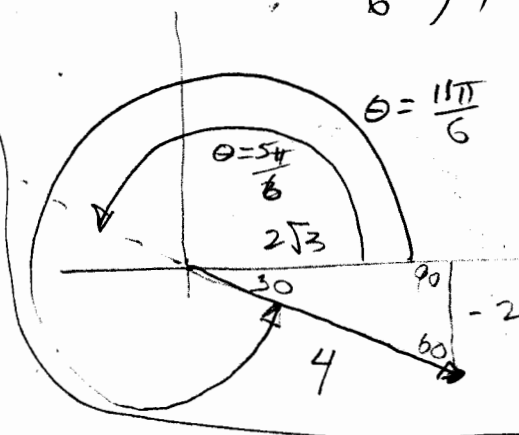
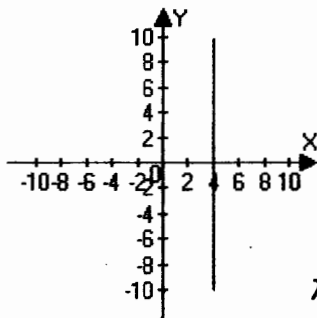


2. For the given point in rectangular coordinates, find two sets of polar coordinates for the point for $0 \leq \theta < 2\pi$.

$(2\sqrt{3}, -2)$

$(4, \frac{11\pi}{6}), (-4, \frac{5\pi}{6})$

3. Match the graph with its polar equation.



- A) $r = 4 \sin \theta$
- B) $r = 8 \cos(4\theta)$
- C) $r = 5(1 + \cos \theta)$
- D) $r = 4 \sec \theta$
- E) $r = 5(1 + \sin \theta)$

$x = 4$
 $r \cos \theta = 4$
 $r = \frac{4}{\cos \theta}$
 $r = 4 \sec \theta$

4. Convert the rectangular equation to polar form.

$x = 3$
 $r \cos \theta = 3$
 $r = \frac{3}{\cos \theta}$
 $r = 3 \sec \theta$

5. Convert the rectangular equation to polar form.

$2x - y + 1 = 0$
 $2r \cos \theta - r \sin \theta + 1 = 0$
 now solve for r:
 $r(2 \cos \theta - \sin \theta) = -1$
 $r = \frac{1}{\sin \theta - 2 \cos \theta}$

6. Convert the polar equation to rectangular form.

$$r=2 \Rightarrow r^2=4 \Rightarrow x^2+y^2=4$$

check to make sure
 $r=-2$ is ok also.

7. Convert the polar equation to rectangular form.

$$r=4\sin\theta$$

$$r^2=4r\sin\theta$$

$$x^2+y^2=4y$$

$$x^2+y^2-4y+4-4=0$$

$$x^2+(y-2)^2=4$$

check to make sure
of $r=0$.

Practice Problems 8 and 9

To find the intersection of two curves in polar coordinates:

r of curve one = r of curve 2 for the same θ .

8. Find the points of intersection of the graphs of the equations.

$$r = 1 + \cos \theta$$

$$r = 3 \cos \theta$$

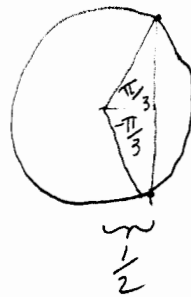
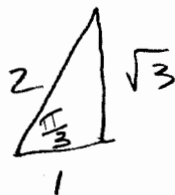
$$1 + \cos \theta = 3 \cos \theta$$

$$1 = 2 \cos \theta$$

$$\frac{1}{2} = \cos \theta$$

$$\theta = \frac{\pi}{3} + 2n\pi$$

$$\text{or } -\frac{\pi}{3} + 2n\pi$$



$$r = 1 + \cos \theta = 1 + \frac{1}{2} = \frac{3}{2}$$

intersections at

$$\left(\frac{3}{2}, \frac{\pi}{3}\right) \text{ and } \left(\frac{3}{2}, -\frac{\pi}{3}\right)$$

9. Find the points of intersection of the graphs of the equations.

$$r = \frac{\theta}{1.9}$$

$$r = 1.9$$

For first solution

$$\frac{\theta}{1.9} = 1.9 \Rightarrow \theta = 1.9^2 = 3.61$$

$$(1.9, 3.61)$$

The second curve is also given by

$$r = -1.9$$

so another solution is

$$\frac{\theta}{1.9} = -1.9 \Rightarrow \theta = -1.9^2 = -3.61$$

$$(-1.9, -3.61)$$

Practice Problems 10-12

Arc length in polar coordinates for $r=f(\theta)$

from pg 743 :

$$s = \int_{\alpha}^{\beta} \sqrt{(f(\theta))^2 + (f'(\theta))^2} d\theta$$

10. Find the length of the curve over the given interval.

$$r = 6 \cos \theta, \quad -\frac{\pi}{2} \leq \theta \leq \frac{\pi}{2}$$

$$f(\theta) = 6 \cos \theta \quad f'(\theta) = -6 \sin \theta$$

$$s = \int_{-\frac{\pi}{2}}^{\frac{\pi}{2}} \sqrt{36 \cos^2 \theta + 36 \sin^2 \theta} d\theta$$

$$= \int_{-\frac{\pi}{2}}^{\frac{\pi}{2}} 6 d\theta = \left[6\theta \right]_{-\frac{\pi}{2}}^{\frac{\pi}{2}} = 6\pi$$

11. Find the length of the curve over the given interval.

$$r = 7 + 7\sin\theta, \quad 0 \leq \theta \leq 2\pi$$

$$S = \int_0^{2\pi} \sqrt{(7 + 7\sin\theta)^2 + (7\cos\theta)^2} d\theta$$

$$= 7\sqrt{2} \int_0^{2\pi} \sqrt{1 + \sin\theta} d\theta$$

remember cosine is sine of the complement

$$\text{so } 1 + \sin\theta = 1 + \cos\left(\frac{\pi}{2} - \theta\right)$$

$$= 2 \cos^2\left(\frac{\frac{\pi}{2} - \theta}{2}\right)$$

by $\frac{1}{2}$ angle formula

$$\text{so } S = 7\sqrt{2} \int_0^{2\pi} \sqrt{2 \cos^2\left(\frac{\frac{\pi}{2} - \theta}{2}\right)} d\theta$$

$$= 14 \int_0^{2\pi} \left| \cos\left(\frac{\frac{\pi}{2} - \theta}{2}\right) \right| d\theta$$

$$u = \frac{\pi}{4} - \frac{\theta}{2}$$

$$du = -\frac{d\theta}{2}$$

$$-2du = d\theta$$

$$S = -28 \int_{\frac{\pi}{4}}^{-\frac{3\pi}{4}} |\cos u| du$$

$$S = -28 \int_{\frac{\pi}{4}}^{-\frac{\pi}{2}} \cos u \, du + 28 \int_{-\frac{\pi}{2}}^{-\frac{3\pi}{4}} \cos u \, du$$

$$= 28 \left[\int_{-\frac{\pi}{2}}^{\frac{\pi}{4}} \cos u \, du - \int_{-\frac{3\pi}{4}}^{-\frac{\pi}{2}} \cos u \, du \right]$$

$$= 28 \left[[\sin u]_{-\frac{\pi}{2}}^{\frac{\pi}{4}} - [\sin u]_{-\frac{3\pi}{4}}^{-\frac{\pi}{2}} \right]$$

$$= 28 \left[\left(\frac{1}{\sqrt{2}} - -1 \right) - \left(-1 - -\frac{1}{\sqrt{2}} \right) \right]$$

$$= 28 \cdot 2 = 56$$

12. Find the length of the curve over the given interval.

$$r = 3(1 + \cos \theta), \quad 0 \leq \theta \leq 2\pi$$

$$f(\theta) = 3(1 + \cos \theta) \quad f'(\theta) = -3 \sin \theta$$

$$s = \int_0^{2\pi} \sqrt{3^2(1 + \cos \theta)^2 + 3^2 \sin^2 \theta} \, d\theta$$
$$= 3\sqrt{2} \int_0^{2\pi} \sqrt{1 + \cos \theta} \, d\theta$$

From the double-angle formula

$$\cos(2u) = 2\cos^2 u - 1$$

we have

$$1 + \cos \theta = 2\cos^2 \frac{\theta}{2}$$

$$s = 6 \int_0^{2\pi} \left| \cos\left(\frac{\theta}{2}\right) \right| \, d\theta$$

$$\text{with } u = \frac{\theta}{2} \quad 2du = d\theta$$

$$s = 12 \int_0^{\pi} |\cos u| \, du = 12 \left[\int_0^{\frac{\pi}{2}} \cos u \, du - \int_{\frac{\pi}{2}}^{\pi} \cos u \, du \right]$$

$$= 12 \left([\sin u]_0^{\frac{\pi}{2}} - [\sin u]_{\frac{\pi}{2}}^{\pi} \right)$$

$$= 12 (1 - 0 - (0 - 1)) = 24$$

13. Find vectors \mathbf{u} and \mathbf{v} whose initial and terminal points are given. Determine whether \mathbf{u} and \mathbf{v} are equivalent.

$$\mathbf{u}: (3,8), (8,10)$$

$$\mathbf{v}: (5,3), (10,5)$$

$$\vec{u} = \langle 5, 2 \rangle$$

$$\vec{v} = \langle 5, 2 \rangle$$

\therefore equivalent

14. Find the vector \mathbf{v} whose initial and terminal points are given below.

(6,4), (11,2)

$$\langle 11-6, 2-4 \rangle = \langle 5, -2 \rangle$$

REVISED

10:50 am, 9/7/07

15. Find the vector \mathbf{v} whose initial and terminal points are given below.

(3.7,7.7), (5.65,5.15)

$$\langle 5.65-3.7, 5.14-7.7 \rangle = \langle 1.95, -2.56 \rangle$$

16. Find (a) $6\mathbf{u}$ (b) $\mathbf{v}-\mathbf{u}$ (c) $1\mathbf{u}+4\mathbf{v}$ given the following values for \mathbf{u} and \mathbf{v} .

$$\mathbf{u} = \langle 3, 8 \rangle, \quad \mathbf{v} = \langle 3, -2 \rangle$$

$$\begin{aligned} \text{(a) } 6\mathbf{u} &= \langle 6 \cdot 3, 6 \cdot 8 \rangle \\ &= \langle 18, 48 \rangle \end{aligned}$$

$$\begin{aligned} \text{(b) } \mathbf{v} - \mathbf{u} &= \langle 3-3, -2-8 \rangle \\ &= \langle 0, -10 \rangle \end{aligned}$$

$$\begin{aligned} \text{(c) } 1\mathbf{u} + 4\mathbf{v} &= \langle 3+4 \cdot 3, 8+4(-2) \rangle \\ &= \langle 15, 0 \rangle \end{aligned}$$

17. The vector \mathbf{v} and its initial point is given. Find the terminal point.

$$\mathbf{v} = \langle -5, -4 \rangle, \quad \text{initial point } (5, 10)$$

$$(5, 10) + \langle -5, -4 \rangle = (0, 6)$$

18. Find the magnitude of the vector given below.

$$\mathbf{v} = \langle 3, 5 \rangle \quad \|\mathbf{v}\| = \sqrt{\mathbf{v} \cdot \mathbf{v}} = \sqrt{9+25} = \sqrt{34}$$

19. Find the unit vector in the direction of \mathbf{u} .

$$\mathbf{u} = \langle 2, 3 \rangle \quad \frac{\mathbf{u}}{\|\mathbf{u}\|} = \frac{\langle 2, 3 \rangle}{\sqrt{4+9}} = \left\langle \frac{2}{\sqrt{13}}, \frac{3}{\sqrt{13}} \right\rangle$$

20. Given the vectors

$$\mathbf{u} = \langle 3, 4 \rangle, \quad \mathbf{v} = \langle -2, 5 \rangle$$

find the following:

(a) $\|\mathbf{u} + \mathbf{v}\|$

$$= \|\langle 3, 4 \rangle + \langle -2, 5 \rangle\|$$

$$= \|\langle 1, 9 \rangle\| = \sqrt{1 + 81} = \sqrt{82}$$

(b) $\frac{\|\mathbf{u}\|}{\|\mathbf{u}\|} = \frac{\|\mathbf{u}\|}{\|\mathbf{u}\|} = 1$

(c) $\frac{\|\mathbf{u} + \mathbf{v}\|}{\|\mathbf{u} + \mathbf{v}\|} = \frac{\|\mathbf{u} + \mathbf{v}\|}{\|\mathbf{u} + \mathbf{v}\|} = 1$

21. Find the component form of a vector \mathbf{v} given its magnitude and the angle it makes with the positive x -axis.

$$\|\mathbf{v}\| = 4, \quad \theta = 240^\circ$$

$$\mathbf{v} = \langle 4 \cos(240^\circ), 4 \sin(240^\circ) \rangle$$

$$= \langle 4(-\frac{1}{2}), 4(-\frac{\sqrt{3}}{2}) \rangle = \langle -2, -2\sqrt{3} \rangle$$

22. Find the component form of a vector \mathbf{v} given its magnitude of \mathbf{u} and $\mathbf{u} + \mathbf{v}$ and the angles that \mathbf{u} and $\mathbf{u} + \mathbf{v}$ make with the positive x -axis.

$$\|\mathbf{u}\| = 6, \quad \theta = 30^\circ, \quad \|\mathbf{u} + \mathbf{v}\| = 10, \quad \theta = 240^\circ$$

$$\mathbf{u} = \langle 6 \cos(30^\circ), 6 \sin(30^\circ) \rangle = \langle 6 \frac{\sqrt{3}}{2}, 6 \cdot \frac{1}{2} \rangle = \langle 3\sqrt{3}, 3 \rangle$$

$$\mathbf{u} + \mathbf{v} = \langle 10 \cos(240^\circ), 10 \sin(240^\circ) \rangle = \langle 10(-\frac{1}{2}), 10(-\frac{\sqrt{3}}{2}) \rangle = \langle -5, -5\sqrt{3} \rangle$$

$$\mathbf{v} = (\mathbf{u} + \mathbf{v}) - \mathbf{u} = \langle -5, -5\sqrt{3} \rangle - \langle 3\sqrt{3}, 3 \rangle = \langle -5 - 3\sqrt{3}, -3 - 5\sqrt{3} \rangle$$

23. Three forces with magnitudes 85 pounds, 90 pounds and 25 pounds act on an object at angles 80° , -40° , and 90° , respectively, with the positive x -axis. Find the direction and magnitude of the resultant force.

$$85 \langle \cos 80^\circ, \sin 80^\circ \rangle + 90 \langle \cos -40^\circ, \sin -40^\circ \rangle + 25 \langle \cos 90^\circ, \sin 90^\circ \rangle$$

(The choices below are given to two decimal places.) $= \langle 83.70, 50.86 \rangle$

24. Find the coordinates of the point that is located 5 units in front of the yz -plane, 7 units in front of the xz -plane, 3 units below the xy -plane.

$$(5, 7, -3)$$

25. Find the distance between the points given below.

$$(2, 3, 1), \quad (6, 5, 7)$$

$$\sqrt{(6-2)^2 + (5-3)^2 + (7-1)^2} = \sqrt{16 + 4 + 36} = \sqrt{56}$$

26. Find the coordinates of the midpoint of the line segment joining the points given below.

$$(-5, 4, -2), (-3, 7, 2) \quad \left(\frac{-5-3}{2}, \frac{4+7}{2}, \frac{-2+2}{2} \right) = (-4, 5.5, 0)$$

27. Find the standard equation of the sphere with center $(4, 3, -4)$, and radius 4.

$$(x-4)^2 + (y-3)^2 + (z+4)^2 = 16$$

28. Find the standard equation of a sphere that has diameter with the end points given below.

center = midpoint = $\left(\frac{1+3}{2}, \frac{4+6}{2}, \frac{1+9}{2} \right) = (2, 5, 5)$
 $(1, 4, 1), (3, 6, 9)$ radius = distance $(3, 6, 9), (2, 5, 5) = \sqrt{(3-2)^2 + (6-5)^2 + (9-5)^2}$
 $(x-2)^2 + (y-5)^2 + (z-5)^2 = 18$ $= \sqrt{18}$

29. Complete the square to write the following equation in the standard equation of a sphere.

$$x^2 - 6x + 9 - 9 + y^2 - 2y + 1 - 1 + z^2 + 8z + 16 - 16 + 1 = 0$$

$$x^2 + y^2 + z^2 - 6x - 2y + 8z + 1 = 0 \quad (x-3)^2 + (y-1)^2 + (z+4)^2 = 25$$

30. Find the component form of the vector \mathbf{u} with the given initial and terminal points.

Initial point: $(4, 2, 5)$ $\vec{u} = \langle 7-4, -2-2, 8-5 \rangle$

Terminal point: $(7, -2, 8)$ $= \langle 3, -4, 3 \rangle$

REVISED
11:00 am, 9/7/07

31. Given the vector \mathbf{v} and its initial point find the terminal point of the vector.

$\mathbf{v} = \langle -3, -3, 1 \rangle$, initial point $(3, 5, -1)$ terminal point
 $= (3-3, 5-3, -1+1)$
 $= (0, 2, 0)$

32. Find the vector $\mathbf{z} = 4\mathbf{v} + 4\mathbf{u} - 5\mathbf{w}$ given that:

$\mathbf{v} = \langle 5, -1, 6 \rangle$, $\mathbf{u} = \langle 3, -1, 5 \rangle$, $\mathbf{w} = \langle -5, -5, 6 \rangle$
 $\mathbf{z} = \langle 4 \cdot 5, 4(-1), 4 \cdot 6 \rangle + \langle 4 \cdot 3, 4(-1), 4 \cdot 5 \rangle + \langle -5(-5), -5(-5), -5(6) \rangle$
 $= \langle 20+12+25, -4-4+25, 24+20-30 \rangle = \langle 57, 17, 14 \rangle$

33. Find the magnitude of the vector given below.

$\mathbf{v} = \langle 0, -2, -3 \rangle$
 $\|\mathbf{v}\| = \sqrt{\mathbf{v} \cdot \mathbf{v}} = \sqrt{0^2 + (-2)^2 + (-3)^2} = \sqrt{4+9} = \sqrt{13}$

34. Find the magnitude of the vector \mathbf{v} given its initial and terminal points.

Initial point: $(-3, -4, -6)$ $\| \langle -8 - (-3), 1 - (-4), -9 - (-6) \rangle \| = \| \langle -5, 5, -3 \rangle \|^2$

Terminal point: $(-8, 1, -9)$ $= \sqrt{25 + 25 + 9} = \sqrt{59}$

35. Find the unit vector in the direction of \mathbf{u} .

$\mathbf{u} = \langle -5, -3, 4 \rangle$ $\|\mathbf{u}\| = \sqrt{25 + 9 + 16} = \sqrt{50} = 5\sqrt{2}$ $\frac{\mathbf{u}}{\|\mathbf{u}\|} = \left\langle \frac{-5}{5\sqrt{2}}, \frac{-3}{5\sqrt{2}}, \frac{4}{5\sqrt{2}} \right\rangle$

36. Find (a) $\mathbf{u} \cdot \mathbf{v}$ (b) $(\mathbf{u} \cdot \mathbf{v})\mathbf{v}$ (c) $\mathbf{u} \cdot (3\mathbf{v})$ given the vectors \mathbf{u} and \mathbf{v} .

$\mathbf{u} = \langle 2, 7 \rangle, \mathbf{v} = \langle 5, 5 \rangle$

(a) $\mathbf{u} \cdot \mathbf{v}$
 $2 \cdot 5 + 7 \cdot 5 = 45$

(b) $(\mathbf{u} \cdot \mathbf{v})\mathbf{v}$
 $45 \langle 5, 5 \rangle = \langle 225, 225 \rangle$

(c) $\mathbf{u} \cdot (3\mathbf{v})$
 $\langle 2, 7 \rangle \cdot \langle 15, 15 \rangle = 2 \cdot 15 + 7 \cdot 15 = 9 \cdot 15 = 135$

37. Find the angle between the vectors for \mathbf{u} and \mathbf{v} given below.

$\mathbf{u} = \langle 1, 5 \rangle, \mathbf{v} = \langle -3, -1 \rangle$
 $\mathbf{u} \cdot \mathbf{v} = 1(-3) + 5(-1) = -8$
 $\|\mathbf{u}\| = \sqrt{1 + 25} = \sqrt{26}$
 $\|\mathbf{v}\| = \sqrt{9 + 1} = \sqrt{10}$

$\cos \theta = \frac{\mathbf{u} \cdot \mathbf{v}}{\|\mathbf{u}\| \|\mathbf{v}\|}$
 $= \frac{-8}{\sqrt{260}} = \frac{-4}{\sqrt{65}}$

38. Find the angle between the vectors for \mathbf{u} and \mathbf{v} .

$\|\mathbf{v}\| = \sqrt{25 + 25} = \sqrt{50}$

$\mathbf{u} = -4\mathbf{i} + 7\mathbf{j}, \mathbf{v} = -5\mathbf{i} + 5\mathbf{j}$

$\mathbf{u} \cdot \mathbf{v} = (-4)(-5) + 7 \cdot 5 = 55$ $\|\mathbf{u}\| = \sqrt{16 + 49} = \sqrt{65}$

$\cos \theta = \frac{\mathbf{u} \cdot \mathbf{v}}{\|\mathbf{u}\| \|\mathbf{v}\|}$

$= \frac{55}{\sqrt{65} \sqrt{50}} = \frac{11}{\sqrt{130}}$

$\theta = \arccos\left(\frac{11}{\sqrt{130}}\right)$

39. Determine whether \mathbf{u} and \mathbf{v} are orthogonal, parallel, or neither.

$\mathbf{u} = \langle 20, 5 \rangle, \mathbf{v} = \langle 3, -12 \rangle$

$\mathbf{u} \cdot \mathbf{v} = 20 \cdot 3 + 5(-12) = 0 \Rightarrow$ orthogonal

40. Determine whether \mathbf{u} and \mathbf{v} are orthogonal, parallel, or neither.

$\mathbf{u} = 12\mathbf{i} + 4\mathbf{j}, \mathbf{v} = 5\mathbf{i} - 15\mathbf{j}$

$\mathbf{u} \cdot \mathbf{v} = 12 \cdot 5 + 4(-15) = 0 \Rightarrow$ orthogonal

41. Determine whether u and v are orthogonal, parallel, or neither.

$$u = \langle 4, 6 \rangle, \quad v = \langle -12, -18 \rangle$$

$$\|u\| = \sqrt{16+36} = \sqrt{52}$$

$$\|v\| = \sqrt{144+324} = \sqrt{468}$$

$$u \cdot v = 4(-12) + 6(-18) = -48 - 108 = -156$$

$$\cos \theta = \frac{u \cdot v}{\|u\| \|v\|}$$

$$= \frac{-156}{\sqrt{52 \cdot 468}} = -1$$

parallel

42. Find the direction cosines of the vector u given below.

$$u = \langle 6, 4, -5 \rangle$$

$$\|u\| = \sqrt{36+16+25} = \sqrt{77}$$

$$\frac{6}{\sqrt{77}}, \quad \frac{4}{\sqrt{77}}, \quad \frac{-5}{\sqrt{77}}$$

43. Find the direction cosines of the vector u given below.

$$u = -4i + 2j + 3k$$

$$\|u\| = \sqrt{16+4+9} = \sqrt{29}$$

$$\frac{-4}{\sqrt{29}}, \quad \frac{2}{\sqrt{29}}, \quad \frac{3}{\sqrt{29}}$$

44. Find the direction angles of the vector u given below.

$$u = \langle 6, 2, 3 \rangle$$

$$\|u\| = \sqrt{36+4+9} = \sqrt{49} = 7$$

$$\frac{6}{7}, \quad \frac{2}{7}, \quad \frac{3}{7}$$

45. Find the projection of u onto v , and the vector component of u orthogonal to v .

$$u = \langle -7, 9 \rangle, \quad v = \langle 7, 5 \rangle$$

$$u \cdot v = -49 + 45 = -4$$

$$u \cdot u = 49 + 81 = 130$$

$$v \cdot v = 49 + 25 = 74$$

Projection of u onto v

$$\frac{u \cdot v}{v \cdot v} v = \frac{-4}{74} \langle 7, 5 \rangle = \left\langle \frac{-14}{37}, \frac{-10}{37} \right\rangle$$

Component of u orthogonal to v

$$u - \left\langle \frac{-14}{37}, \frac{-10}{37} \right\rangle = \left\langle \frac{-245}{37}, \frac{343}{37} \right\rangle$$

46. Find the projection of u onto v , and the vector component of u orthogonal to v .

$$u = \langle -1, 7, 5 \rangle, \quad v = \langle 5, 10, 2 \rangle$$

$$u \cdot v = -5 + 70 + 10 = 75$$

$$u \cdot u = 1 + 49 + 25 = 75$$

$$v \cdot v = 25 + 100 + 4 = 129$$

Projection of u onto v

$$\frac{u \cdot v}{v \cdot v} v = \frac{75}{129} \langle 5, 10, 2 \rangle$$

$$\left\langle \frac{125}{43}, \frac{250}{43}, \frac{50}{43} \right\rangle$$

Component of u orthogonal to v

$$u - \frac{u \cdot v}{v \cdot v} v$$

$$= \left\langle \frac{-168}{43}, \frac{51}{43}, \frac{165}{43} \right\rangle$$